

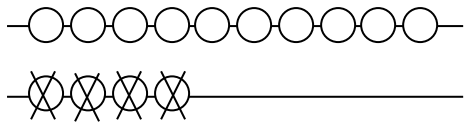
ΑΦΑΙΡΕΣΗ ΜΕ ΤΟ 10

Όνομα: _____ Τάξη: _____ Ημερ.: 07/05/2020

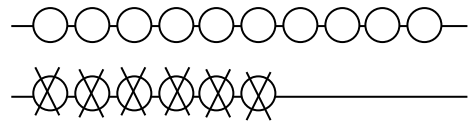
1. Ας θυμηθούμε.

$4 - 2 =$	$8 - 4 =$	$4 - 4 =$	$5 - 4 =$	$10 - 4 =$
$5 - 3 =$	$5 - 1 =$	$5 - 5 =$	$6 - 1 =$	$10 - 7 =$
$6 - 4 =$	$6 - 2 =$	$6 - 3 =$	$8 - 3 =$	$10 - 1 =$
$7 - 5 =$	$7 - 3 =$	$7 - 4 =$	$2 - 1 =$	$10 - 2 =$

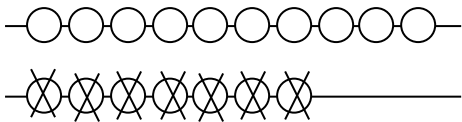
2. Μέτρησε και βρες τη διαφορά.



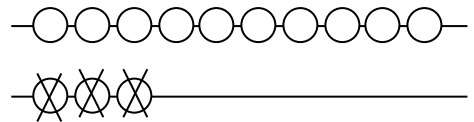
$$14 - 4 = \square$$



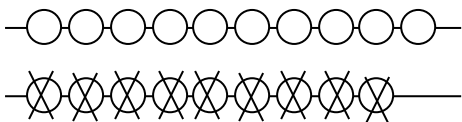
$$16 - 6 = \square$$



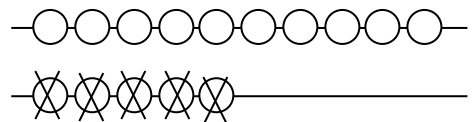
$$17 - 7 = \square$$



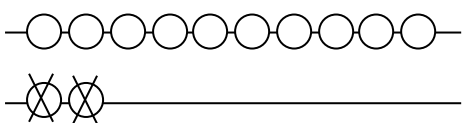
$$13 - 3 = \square$$



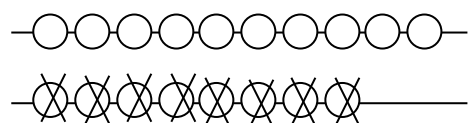
$$19 - 9 = \square$$



$$15 - 5 = \square$$

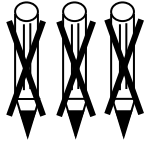
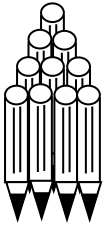


$$12 - 2 = \square$$



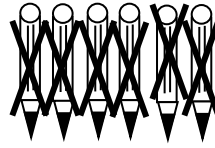
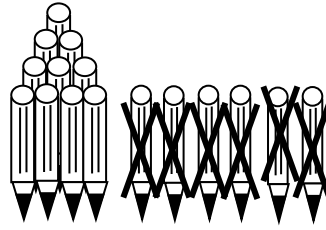
$$18 - 8 = \square$$

3. Πόσα μογύβια έχει τώρα το κάθε παιδί;





$$\boxed{13} - \square = \square$$

Τα μογύβια του Νίκου είναι _____.



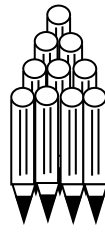
$$\square - \square = \square$$

Τα μογύβια του Μάκη είναι _____.



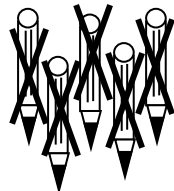

$$\boxed{18} - \square = \square$$

Τα μογύβια της Άννας είναι _____.



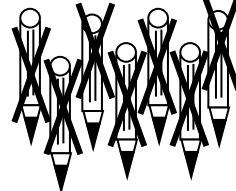
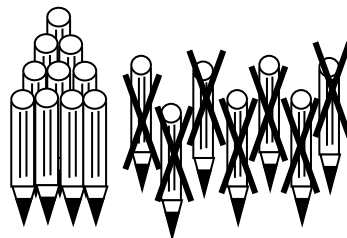
$$\boxed{14} - \square = \square$$

Τα μογύβια της Μαρίας είναι _____.



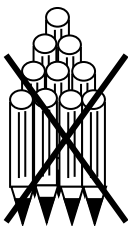
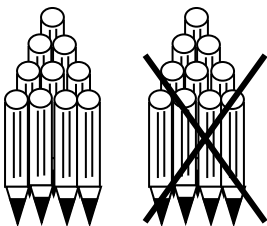
$$\square - \square = \square$$

Τα μογύβια της Νανιάς είναι _____.



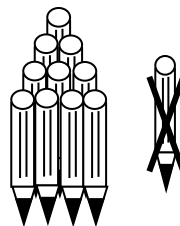
$$\square - \square = \square$$

Τα μογύβια του Χρίστου είναι _____.



$$\square - \square = \square$$


Τα μογύβια του Παύλου είναι _____.




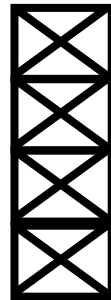
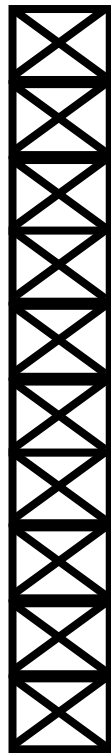
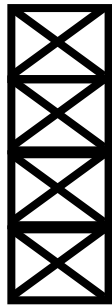
$$\square - \square = \square$$

Τα μογύβια της Οσίας είναι _____.

Παρατήρησε προσεκτικά τις δυο εικόνες και γύσε τις εξισώσεις όπως το παράδειγμα.



$$7 - 3 = 4$$



$$17 - 3 = 14$$

5 - 3 = _	5 - 1 = _	7 - 6 = _	7 - 5 = _
15 - 3 = __	15 - 1 = __	17 - 6 = __	17 - 5 = __
5 - 4 = _	5 - 2 = _	7 - 4 = _	7 - 2 = _
15 - 4 = __	15 - 2 = __	17 - 4 = __	17 - 2 = __
9 - 1 = _	9 - 4 = _	8 - 7 = _	8 - 6 = _
19 - 1 = __	19 - 4 = __	18 - 7 = __	18 - 6 = __
9 - 2 = _	9 - 6 = _	8 - 4 = _	8 - 3 = _
19 - 2 = __	19 - 6 = __	18 - 4 = __	18 - 3 = __
4 - 2 = _	4 - 3 = _	6 - 3 = _	6 - 4 = _
14 - 2 = __	14 - 3 = __	16 - 3 = __	16 - 4 = __

